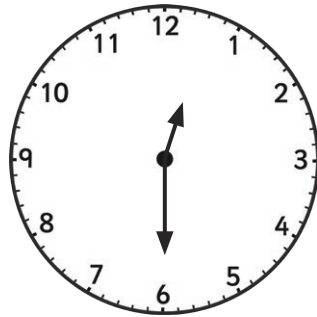


Tell the Time in 24-Hour Format: Writing the Time Before and After

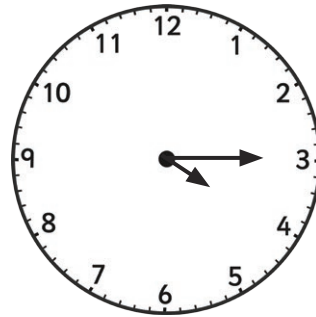
Tell the time on each clock, follow the instruction, and write in 24-hour format.
All the times are between noon and midnight.



45 minutes before:




1 hour after:



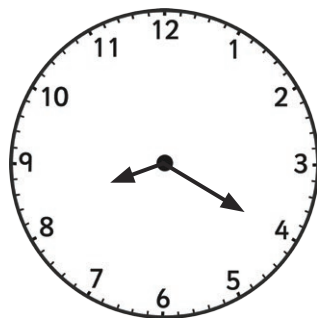
35 minutes before:



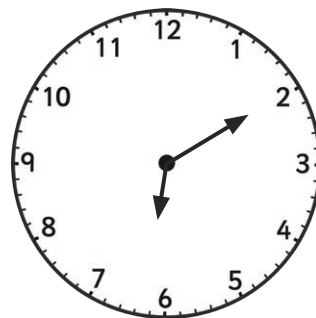
an hour and
a half after:



25 minutes before:



55 minutes after:



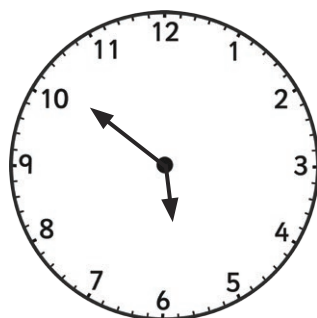
40 minutes before:



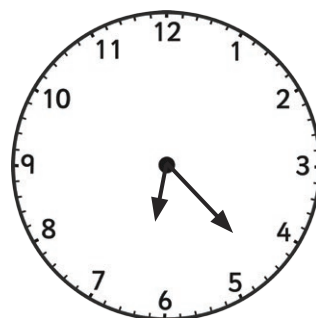
an hour and a
quarter after:




19 minutes before:



48 minutes after:



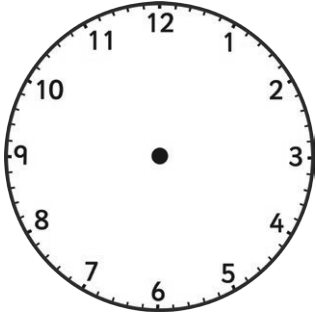
62 minutes before:



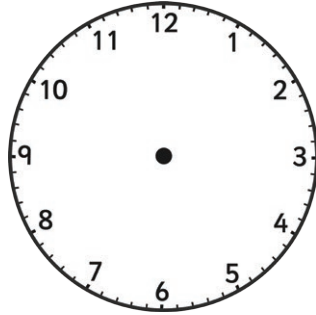
94 minutes after:

Tell the Time in 24-Hour Format: Drawing the Time Before and After

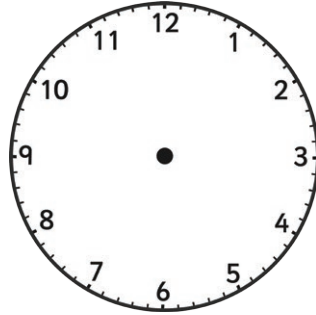
Draw the time on each clock.



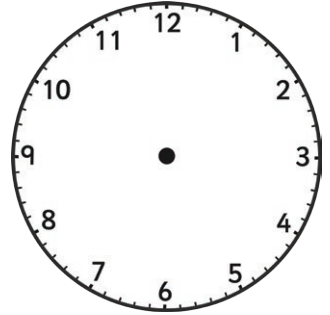
1 hour before
14:00



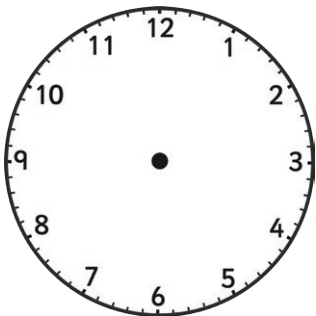
45 minutes after
15:15



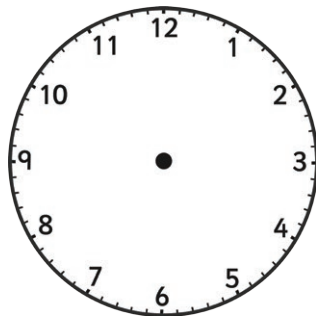
15 minutes before
20:10



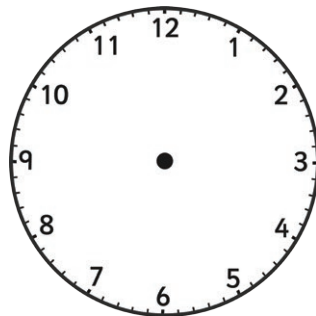
an hour and a quarter
after 19:50



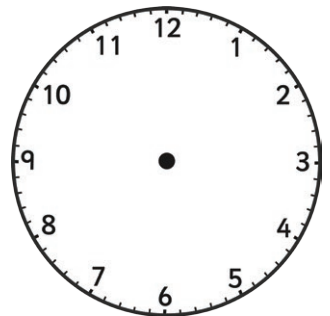
25 minutes before
13:10



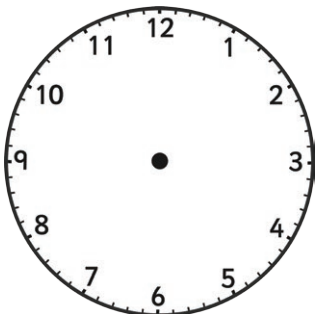
50 minutes after
22:35



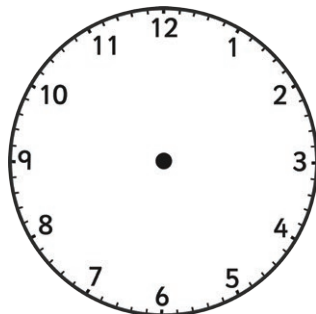
35 minutes before
16:50



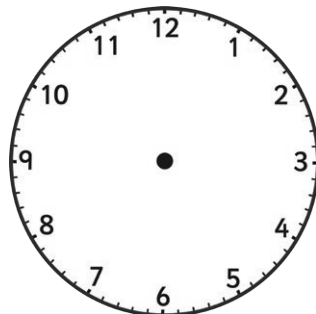
an hour and 50
minutes after 20:25



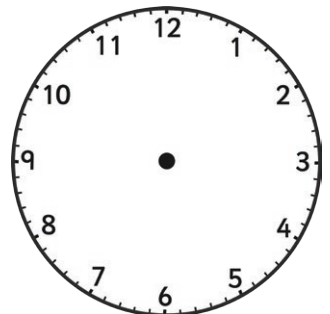
16 minutes before
12:56



34 minutes after
19:52



69 minutes before
16:23




101 minutes after
18:54

Tell the Time in 24-Hour Format: Writing the Time Before and After Answers

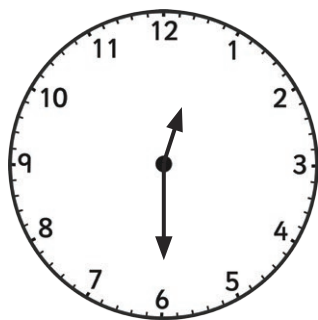
Tell the time on each clock, follow the instruction, and write in 24-hour format.

All the times are between noon and midnight.



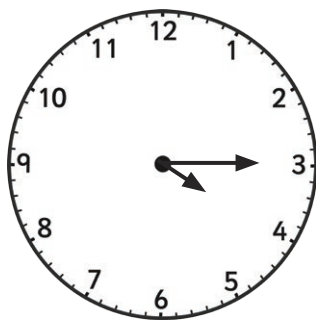
45 minutes before:

16:15




1 hour after:

13:30




35 minutes before:

15:40



an hour and
a half after:

21:40



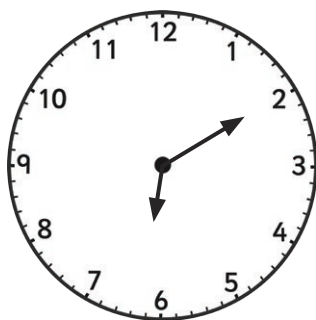
25 minutes before:

13:15




55 minutes after:

21:15




40 minutes before:

17:30




an hour and a
quarter after:

23:55



19 minutes before:

13:53




48 minutes after:

18:39



62 minutes before:

17:21




94 minutes after:


21:27

Tell the Time in 24-Hour Format: Drawing the Time Before and After Answers

Draw the time on each clock.




1 hour before
14:00



45 minutes after
15:15




15 minutes before
20:10



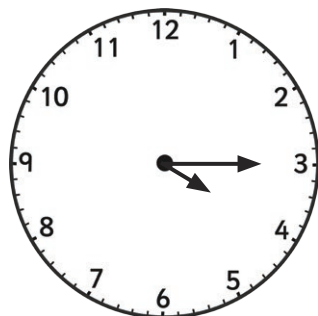
an hour and a quarter
after 19:50




25 minutes before
13:10



50 minutes after
22:35




35 minutes before
16:50



an hour and 50
minutes after 20:25




16 minutes before
12:56



34 minutes after
19:52



69 minutes before
16:23



101 minutes after
18:54